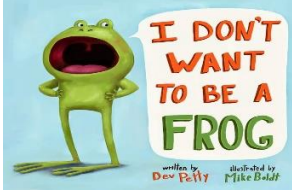




Kindergarten Choice Lessons for the week of May 4, 2020

Pick three in a row to complete each day!

<p>READING</p> <p>Click on the story to listen, then write about your favorite part.</p>  <p>https://youtu.be/mqLB9pbJprU</p>	<p>WRITING</p> <p>Draw and write about the four parts of the frog lifecycle: egg, tadpole, froglet, frog.</p>	<p>SIGHT WORDS</p> <p>Write sight words using green markers. Cut around them in a circle to make lily pads. Hop like a frog and say each word!</p>
<p>MATH</p> <p>10 frogs are playing in a pond. 6 are big, and the rest are small. How many frogs are small? A frog ate 3 flies. Then, he ate 8 more. How many did the frog eat in all? Draw a picture and write an equation.</p>	<p>STEM/SCIENCE</p> <p>Click on the video to learn about frogs vs. toads and then compare/contrast them.</p>  <p>https://youtu.be/rVAjUSLkDLo</p>	<p>WRITING</p> <p>What would you do if you were a frog for a day? Write about your adventures and draw a picture.</p>
<p>WRITING</p> <p>Write 3 facts about frogs. Use words like "can," "have," and "are" to help you. Draw a picture for each fact.</p>	<p>READING</p> <p>Click on the story to listen, then talk with a grown up about the sequence - what happened first? next? last?</p>  <p>https://youtu.be/kbY1md0imls</p>	<p>MATH</p> <p>A frog ate 3 flies. Then, he ate 8 more. How many did the frog eat in all? Draw a picture and write an equation. Please submit this math picture on your ClassDojo portfolio by Friday!</p>